



CONTROL TEST 2

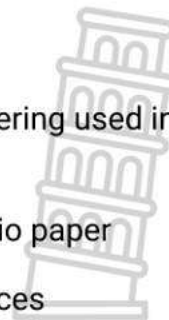
SEPTEMBER 2022

SUBJECT	:	GEOGRAPHY
GRADE	:	10
TERM	:	THREE
DURATION	:	ONE HOUR
EXAMINAR	:	SEDIBENG EAST
MODERATOR	:	GAUTENG WEST
TRANSLATION	:	SEDIBENG EAST
MARKS	:	60

Stanmorephysics.com This question paper consists of 6 pages

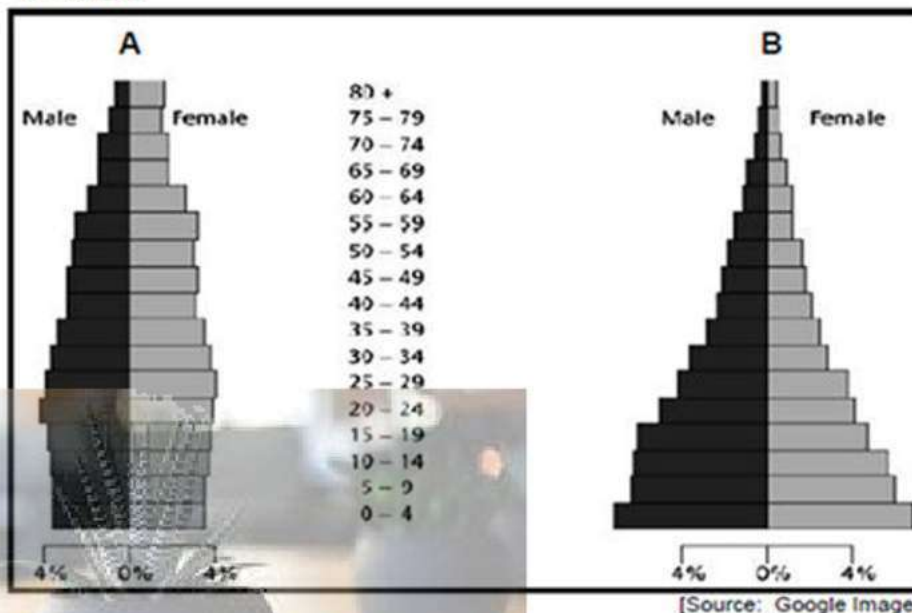
INSTRUCTIONS AND INFORMATION

1. This question paper consists of SIX sub-sections
2. Answer ALL the questions for 60 marks.
3. All diagrams / extracts are included.
4. Leave a line between subsections of questions.
5. Number the answers correctly according to the numbering used in the question paper.
6. Do NOT write in the margins of the Answer sheet/ Folio paper
7. Paragraph questions must be answered in full sentences
8. Write neatly and legibly.



1.1 Refer to the two pyramids below that explains the population of a country and choose between pyramids A and B from COLUMN B that gives the correct description for the statement in column A. Write only Pyramid A or Pyramid B next to the question numbers (1.1.1 to 1.1.7) on the answer sheet, e.g., 1.1.8 Pyramid B.

SOURCE 1



COLUMN A	COLUMN B
1.1.1 The pyramid indicating a country with the highest birth and death rates is ...	Pyramid A Pyramid B
1.1.2 The pyramid indicating a country with the slowest population growth is ...	Pyramid A Pyramid B
1.1.3 The pyramid indicating a country with the lowest life expectancy is ...	Pyramid A Pyramid B
1.1.4 The pyramid indicating a country with a large number of adults is ...	Pyramid A Pyramid B
1.1.5 The pyramid indicating a developing country is ...	Pyramid A Pyramid B
1.1.6 The pyramid indicating a country with the best developed medical infrastructure is ...	Pyramid A Pyramid B
1.1.7 The pyramid that represents a country with a healthy workforce is ...	Pyramid A Pyramid B

(7 x 1) (7)

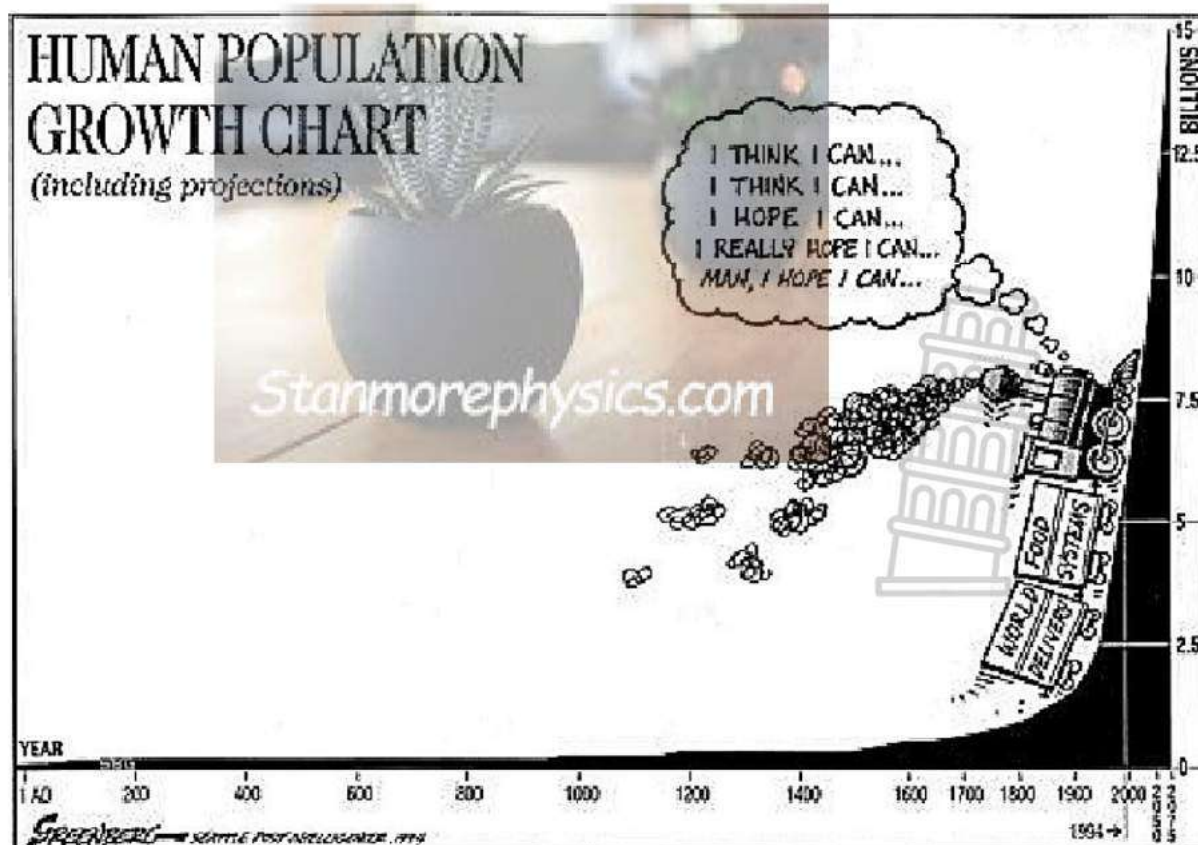
1.2 Refer to the following statements and say if the following factors will lead to a DENSE or SPARSE population density e.g., 1.2.9 dense



- 1.2.1 Mountainous areas will lead to (dense/sparse) population.
- 1.2.2 Moderate climates e.g., coastlines will lead to (dense/sparse) population.
- 1.2.3 Flat grasslands e.g., Highveld will lead to a (dense/sparse) population.
- 1.2.4 Flat areas with infertile soil e.g., Karoo will lead to a (dense/sparse) population.
- 1.2.5 The availability of minerals e.g., gold will lead to (dense/sparse) population.
- 1.2.6 Dry areas e.g., Deserts will lead to (dense/sparse) areas populations.
- 1.2.7 Areas with dense forests e.g., Amazon Forest will lead to a (dense/spares) population
- 1.2.8 Areas with lots of industries will lead to a (dense/sparse) population.

(8 x 1) (8)
[15]

1.3 Study the FIGURE below that refer to Human Population Growth.



1.3.1 Describe how the growth rate is calculated? (1 x 2) (2)



1.3.2 Refer to FIGURE 1.3 and determine if the population growth rate between AD and 1800 was steady or rapid growing. (1 x 1) (1)

1.3.3 Explain how the birth rate and death rate compare with each other Between AD and 1800. (1 x 2) (2)

1.3.4 Can the period between 1800 and 2000 be described as a period of population growth or population explosion? (1 x 1) (1)

1.3.5 Refer to FIGURE 1.3 and identify TWO problems the earth must cope with to sustain life. (2 x 1) (2)

1.3.6 Discuss how each of the following factors will increase the population growth in the world.

(a) Medical facilities.

(b) Sanitation

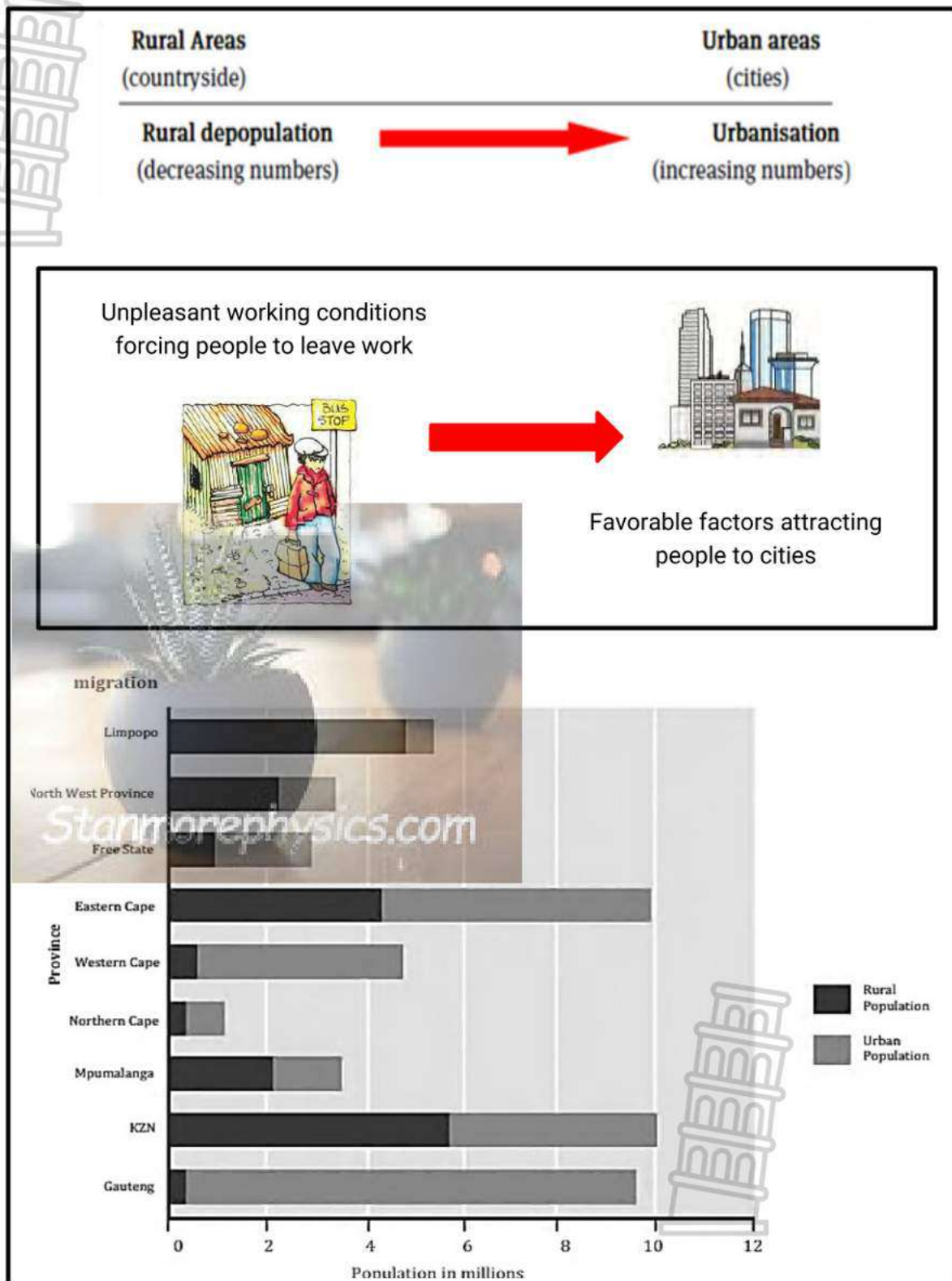
(c) Food supplies.

(3 x 2) (6)

[14]



1.4 Refer to FIGURE 1.4 an infographic based on Rural Urban Migration.



1.4.1 Define the term *rural urban migration*. (1 x 2) (2)

1.4.2 Discuss TWO problems people experience in the rural area. (2 x 2) (4)

1.4.3 Give ONE pull factor why people would prefer to stay in urban areas. (1 x 2) (2)



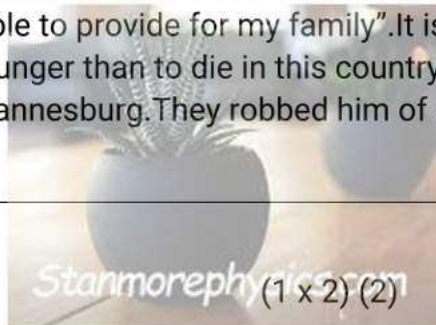
- 1.4.4 Identify the province in the bar-graph with the highest urban population. (1 x 1) (1)
- 1.4.5 How many people are staying in the urban areas in the province mentioned in QUESTION 1.4.4. (1 x 1) (1)
- 1.4.6 Identify the province where the difference between the rural and urban population are the biggest. (1 x 2) (2)
- 1.4.7 Explain the large difference between rural and urban population in the Province identified in QUESTION 1.4.6 by referring to industrialization (many factories) and area available for agriculture. (2 x 2) (4)

[16]

1.5 Refer to the SOURCE on Refugees.

REFUGEES FLEE FROM ATTACKS BY SOUTH-AFRICANS

John left Zimbabwe with the hope to find a safe haven in South-Africa. Now he is in faer for his life. "I left my home to be able to provide for my family". It is actually better to stay at home and die of hunger than to die in this country. A group of local people attacked John in Johannesburg. They robbed him of all his valuables.



- 1.5.1 Explain the term *Refugee*. (1 x 2) (2)
- 1.5.2 Refer to SOURCE 1.5 and determine if John can be seen as a forced or voluntary migrant. Quote evidence from the source to proof your answer. (1 + 1 x 2) (3)
- 1.5.3 John was most probably attacked by the local people because of xenophobia. Explain the term xenophobia. (1 x 2) (2)
- 1.5.4 In a paragraph of approximately EIGHT lines discuss TWO reasons why Zimbabweans would emigrate to South-Africa and TWO challenges they will experience in South-Africa. (4 x 2) (8)

[15]

Total : 60

