





**MATHEMATICS
ANNUAL TEACHING PLAN
GRADE 11 – 2025**


NAME OF SCHOOL:

NAME OF TEACHER:

TERM 1										
NUMBER OF DAYS	DATE STARTED	DATE COMPLETED	TOPIC	CURRICULUM STATEMENT	ASSESSMENT	F/IF	DH: SIGNATURE and DATE	% COMPLETED		
								Term	Year	
15/01 – 20/01 (4 days)			EXPONENTS AND SURDS	1. Simplify expressions using the laws of exponents for rational exponents where $x^{\frac{p}{q}} = \sqrt[q]{x^p}; x > 0; q > 0$				9	3	
21/01 – 22/01 (2 days)				2. Solve equations using the laws of exponents for rational exponents where $x^{\frac{p}{q}} = \sqrt[q]{x^p}; x > 0; q > 0$						
23/01 – 24/01 (2 days)				3. Add, Subtract, Multiply and Divide Simple Surds.				14	5	
				4. Solve simple equations involving surds.				19	6	
27/01 – 04/02 (7 days)			EQUATIONS	1. Revision of factorisation. 2. Quadratic equations (by factorisation). 3. Complete the square. 4. Quadratic equations (by using the quadratic formula).				35	12	
05/02 – 10/02 (4 days)			INEQUALITIES	Quadratic inequalities in one unknown (interpret solutions graphically).				44	15	
11/02 – 14/02 (4 days)			SIMULTANEOUS EQUATIONS	Equations in two unknowns, one of which is linear and the other quadratic. NB: To apply this skill also in other contexts, e.g. to determine the points of intersection of a straight line and a hyperbola				53	18	
17/02 – 19/02 (3 days)			NATURE OF ROOTS	Nature of roots.	INVESTIGATION SBA Weighting: 15	F		60	21	

NUMBER OF DAYS	DATE STARTED	DATE COMPLETED	TOPIC	CURRICULUM STATEMENT	ASSESSMENT	F/IF	DH: SIGNATURE and DATE	% COMPLETED	
								Term	Year
20/02 – 07/03 (12 days)			 <p>TRIGONOMETRIC IDENTITIES and REDUCTION FORMULAE</p>	<p>1. Derive and use the identities:</p> <ul style="list-style-type: none"> $\tan \theta = \frac{\sin \theta}{\cos \theta}; k \neq k.90^\circ, k$ an odd integer $\sin^2 \theta + \cos^2 \theta = 1$ <p>2. Derive and use reduction formulae to simplify the following expressions:</p> <ul style="list-style-type: none"> $\sin(90^\circ \pm \theta); \cos(90^\circ \pm \theta)$ $\sin(180^\circ \pm \theta); \cos(180^\circ \pm \theta); \tan(180^\circ \pm \theta)$ $\sin(360^\circ \pm \theta); \cos(360^\circ \pm \theta); \tan(360^\circ \pm \theta)$ and $\sin(-\theta); \cos(-\theta); \tan(-\theta)$. <p>3. Proving trigonometric identities</p> <p>4. Determine for which values of a variable an identity holds.</p>				88	30
10/03 – 14/03 (5 days)			TRIG EQUATIONS and GENERAL SOLUTIONS	Determine general solutions of trigonometric equations. Also, determine solutions in specific (given) intervals.				100	34
17/03 – 28/03 (9 days)			REVISION and MARCH TEST	MARCH TEST to cover the work done during Term 1.	MARCH TEST SBA Weighting: 14	F			

NUMBER OF DAYS	DATE STARTED	DATE COMPLETED	TOPIC	CURRICULUM STATEMENT	ASSESSMENT	F/IF	HOD: SIGNATURE and DATE	% COMPLETED	
								Term	Year
08/04 – 11/04 (4 days)			EUCLIDEAN GEOMETRY	 <ol style="list-style-type: none"> Accept results established in earlier grades as axioms and that a tangent to a circle is perpendicular to the radius, drawn to the point of contact. Investigate and prove the following theorems of the geometry of circles, assuming results from earlier grades: <ul style="list-style-type: none"> The line drawn from the centre of a circle perpendicular to a chord bisects the chord The line drawn from the centre of a circle that bisects a chord is perpendicular to the chord The perpendicular bisector of a chord passes through the centre of the circle. The angle at the centre of a circle is double the size of the angle at the circle Angles subtended by a chord of the circle, on the same side of the chord, are equal. 				10	37
14/04 – 17/04 (4 days)				<ol style="list-style-type: none"> Investigate and prove the following theorems of the geometry of circles: <ul style="list-style-type: none"> The opposite angles of a cyclic quadrilateral are supplementary. Two tangents drawn to a circle from the same point outside the circle are equal in length. The angle between the tangent to a circle and the chord drawn from the point of contact is equal to the angle in the alternate segment. 				19	40
22/04 – 25/04 (4 days)				<ol style="list-style-type: none"> Use the above theorems and their converses, where they exist, to solve circle geometry problems and prove riders. The proofs of the FIVE theorems printed in bold above can be asked in examinations. (See 2021 Gr. 12 Examination Guidelines, page 7.) 				29	44
05/05 – 06/05 (2 days)			ANALYTICAL GEOMETRY	<ol style="list-style-type: none"> Revise: <ul style="list-style-type: none"> Distance between the two points Gradient of the line segment connecting the two points (and from that identify parallel lines); and Coordinate of the midpoint of the line segment joining two points. 				33	45

NUMBER OF DAYS	DATE STARTED	DATE COMPLETED	TOPIC	CURRICULUM STATEMENT	ASSESSMENT	F/IF	HOD: SIGNATURE and DATE	% COMPLETED	
								Term	Year
07 /05 – 16/05 (8 days)			 ANALYTICAL GEOMETRY	2. Derive and apply the equation of a line through: <ul style="list-style-type: none"> two given points. one point and parallel or perpendicular to a given line. Collinear points. 3. The inclination (θ) of a given line, where $m = \tan \theta$ is the gradient of the line ($0^\circ \leq \theta \leq 180^\circ$).				52	52
19/05 – 22 /05 (4 days)			FUNCTIONS	1. Revise the effect of the parameters a and q and investigate the effect of p on the graph of the function defined by $y = f(x) = a(x + p)^2 + q$				62	55
23/05 – 27/05 (3 days)				2. Revise the effect of the parameters a and q and investigate the effect of p on the graph of the function defined by $y = f(x) = \frac{a}{x + p} + q$				69	57
28/05 – 30/05 (3 days)			FUNCTIONS	3. Revise the effect of the parameters a and q and investigate the effect of p on the graph of the function defined by $y = f(x) = a.b^{x+p} + q$, where $b > 0$ and $b \neq 1$.	ASSIGNMENT	F		76	60
02/06 – 04/06 (3 days)				4. Investigate numerically the average gradient between two points on a curve. 5. Develop an intuitive understanding of the concept of the gradient of a curve at a point. 6. Interpretation, application and practical problems. NB: Integration between Nature of roots and Functions.					83
05/06 – 13/06 (7 days)			TRIGONOMETRIC FUNCTIONS	7. Investigate the effect of the parameter k on the graphs of the functions defined by, $y = \sin(kx)$, $y = \cos(kx)$ and $y = \tan(kx)$ 8. Investigate the effect of the parameter p on the graphs of the functions defined by, $y = \sin(x + p)$, $y = \cos(x + p)$ and $y = \tan(x + p)$ 9. Draw sketch graphs defined by: $y = a \sin k(x + p)$, $y = a \cos k(x + p)$ and $y = a \tan k(x + p)$ at most two parameters at a time	SBA Weighting: 15			100	67
17/06 – 27/06 (09 days)			REVISION and JUNE EXAM	JUNE TEST to cover the work done during Term 2, excluding graphs of trigonometric functions.	JUNE EXAM SBA Weighting: 14	F			

NUMBER OF DAYS	DATE STARTED	DATE COMPLETED	TOPIC	CURRICULUM STATEMENT	ASSESSMENT	F/IF	DH: SIGNATURE and DATE	% COMPLETED	
								Term	Year
22/07 – 25/07 (4 days)			TRIGONOMETRY	1. Prove and apply the: sine rule, cosine rule and area rule.				10	71
28/07 – 01/08 (5 days)				2. Solve problems in two dimensions using the sine, cosine and area rules.				20	74
04/08 – 15/08 (10 days)			STATISTICS	1. Revise Grade 10 statistics 2. Histograms <ul style="list-style-type: none"> • Frequency polygons • Variance and standard deviation of ungrouped data • Ogives (cumulative frequency curves). • Symmetric and skewed data. • Identification of outliers 	TERM 3 TEST SBA Weighting: 14	F		37	79
18/08 – 29/08 (10 days)			PROBABILITY	1. Revise Grade 10 Probability. 2. Identify dependent and independent events and the product rule for independent events: $P(A \text{ and } B) = P(A) \times P(B)$ 3. The use of Venn diagrams to solve probability problems, 4. deriving and applying formulae for any three events A, B and C in a sample space S. 5. Use tree diagrams for the probability of consecutive or simultaneous events which are not necessarily independent. 6. Use contingency tables to solve probability problems.				56	86
01/09 – 10/09 (8 days)			FINANCE, GROWTH AND DECAY	1. Revise Grade 10 Finance and Growth 2. Use the simple and compound decay formulae, $A = P(1 - ni)$ and $A = P(1 - i)^n$, to solve problems (including straight line depreciation and depreciation on a reducing balance). 3. Different periods of compound growth and decay. Effective and nominal interest rates.				73	91

NUMBER OF DAYS	DATE STARTED	DATE COMPLETE	TOPIC	CURRICULUM STATEMENT	ASSESSMENT	F/IF	DH: SIGNATURE and DATE	% COMPLETED	
								Term	Year
11/09 – 17/09 (5 days)			MEASUREMENT	<ol style="list-style-type: none"> 1. Revise the volume and surface areas of right-prisms and cylinders. 2. Study the effect on volume and surface areas when multiplying any dimension by a constant factor k. 3. Calculate volume and surface areas of spheres, right prisms, right cones and combination of those objects (figures). 				100	95
18/09 – 03/10 (11 days)			REVISION and SEPTEMBER TEST	SEPTEMBER TEST to cover graphs of trigonometric functions and the work done during Term 3, excluding measurement.	SEPTEMBER TEST SBA Weighting: 14	F			

TERM 4

NUMBER OF DAYS	DATE STARTED	DATE COMPLETED	TOPIC	CURRICULUM STATEMENT	ASSESSMENT	F/IF	DH: SIGNATURE and DATE	% COMPLETED	
								Term	Year
13/10 – 15/10 (3 days)			NUMBER PATTERNS	Revise linear number patterns				30	96
16/10 – 24/10 (7 days)				Investigate number patterns leading to those where there is a constant second difference between consecutive terms, and the general term is therefore quadratic.	TERM 4 TEST SBA Weighting: 14	F		100	100
27/10 – 31/10 (5 days)			REVISION OF ALGEBRA & FUNCTIONS	Revision					
03/11 – 07/11 (5 days)			REVISION OF TRIGONOMETRY & EUCLIDEAN GEOMETRY	Revision					
10/11 – 10/12 (23 days)			REVISION and NOVEMBER EXAM	NOVEMBER EXAMINATION: PAPER 1: 150 MARKS (Algebra, Functions, Number Pattern, Finance and Probability) PAPER 2: 150 MARKS (Statistics, Analytical Geometry, Trigonometry, Euclidean Geometry and Measurement)	NOVEMBER EXAMINATION	F			

TERM 1	TERM 2	TERM 3	TERM 4
MARCH TEST	JUNE EXAMINATION	SEPTEMBER TEST	NOVEMBER EXAMINATION
	PAPER 1		PAPER 1:
DURATION: 1½ hours	DURATION: 2 hours	DURATION: 1½ hours	DURATION: 3 hours
TOTAL MARKS: 75	TOTAL MARKS: 100	TOTAL MARKS: 75	TOTAL MARKS: 150
This test will consist of the following sections:	This examination paper will consist of the following sections:	This test will consist of the following sections:	This examination paper will consist of the following sections:
Exponents and surds 15±3 marks	Exponents and surds 15±3 marks	Probability 20±3 marks	Algebra, equations and inequalities 45±3 marks
Equations and inequalities 30±3 marks	Equations and inequalities 35±3 marks	Statistics 15±3 marks	Number patterns 20±3 marks
Trigonometric identities and reduction formulae, 30±3 marks	Functions and graphs 50±3 marks	Proof and Application of Sine, Cosine and Area Rules (2D problems) 10±3 marks	Finance, growth and decay 15±3 marks
		Graphs of Trigonometric Functions 10±3 marks	Functions and graphs 45±3 marks
		Finance, growth and decay 20±3 marks	Probability 25±3 marks
	PAPER 2:		PAPER 2:
	DURATION: 2 hours		DURATION: 3 hours
	TOTAL MARKS: 100		TOTAL MARKS: 150
	This examination paper will consist of the following sections:		This examination paper will consist of the following sections:
	Analytical Geometry 30±3 marks		Statistics 20±3 marks
	Trigonometry 30±3 marks		Analytical Geometry 30±3 marks
	Euclidean Geometry 40±3 marks		Trigonometry 50±3 marks
			Euclidean Geometry and Measurement 50±3 marks
Completion date of the last topic for the March Test: 07/03/2025	Completion date of the last topic for the June Examination: 04/06/2025	Completion date of the last topic for the September Test: 10/09/2025	