



**KWAZULU-NATAL
DEPARTMENT OF EDUCATION**

NATIONAL CURRICULUM STATEMENT-CAPS

GRADE 12 SCOPES


GEOGRAPHY

2025


PLEASE NOTE: When administering MAPWORK TASK (i.e. TASK 1), teachers must not use the maps of Ladysmith or Bloemfontein. These maps will only be used in the Mid-Year and Preparatory Examinations.

TASK 2 CONTROLLED TEST	THEORY SECTION ONLY	
	MARKS : 60	
	TIME : 1 hour	
	QUESTION 1	
	Climate and Weather	30 Marks
	Short objective, data response	06
	Sub-section question	24
	QUESTION 2	
	Geomorphology	30 Marks
	Short objective, data response	06
	Sub – section question	24
	<i>NB: One paragraph question in one of the two questions.</i>	
	<i>The river rejuvenation, river capture, catchment and river management will not be examined in the 2025 March Common Test.</i>	




TASK 4	ONE PAPER ONLY
MID-YEAR EXAM	MARKS : 150
	TIME : 3H00
	<p>QUESTION 1 Climate and Weather & Geomorphology 60 Marks</p> <ul style="list-style-type: none">• Short objective questions (Climate & weather 07 marks & Geomorphology 08 marks= 15 marks)• One sub-question of 15 marks on Climate and Weather• Two sub-questions of 15 marks on Geomorphology <p>NB. ONE paragraph question of 8 marks on either Climate and weather or geomorphology.</p> <p>QUESTION 2 (Rural and Urban Settlements) 60 Marks</p> <ul style="list-style-type: none">• Short objective questions (15 Marks)• 3 sub-questions of 15 marks each on Rural and Urban Settlements <p>NB. ONE paragraph question of 8 marks on either Rural or Urban settlement.</p> <p>QUESTION 3 (Mapwork) 30 Marks</p> <ul style="list-style-type: none">• Map Skills and calculations (10 Marks)• Map interpretation (12 Marks)• GIS (8 Marks) <p>NB: The Topographical map and Orthophoto map of LADYSMITH will be used</p> <p>Stanmorephysics.com</p>



TASK 6 PREPARATORY EXAMINATION	PAPER ONE
	MARKS : 150
	TIME : 3 hour
	<p>QUESTION 1 (Climate and Weather) 60 Marks</p> <ul style="list-style-type: none">• Short objective questions (15 Marks)• 3 sub-questions of 15 marks each on Climate and Weather <p>NB. ONE paragraph question of 8 marks on any of the three sub-questions</p> <p>QUESTION 2 (Geomorphology) 60 Marks</p> <ul style="list-style-type: none">• Short objective questions (15 Marks)• 3 sub-questions of 15 marks each on Geomorphology <p>NB. ONE paragraph question of 8 marks on any of the three sub-questions</p> <p>QUESTION 3 (Mapwork) 30 Marks</p> <ul style="list-style-type: none">• Map Skills and calculations (10 Marks)• Map interpretation (12 Marks)• GIS (8 Marks) <p>NB: The Topographical map and Orthophoto map of LADYSMITH will be used</p>



TASK 6	PAPER TWO
PREPARATORY	MARKS : 150
EXAMINATION	TIME : 3 hour
	<p>QUESTION 1 (Rural and Urban Settlements) 60 Marks</p> <ul style="list-style-type: none">• Short objective questions (15 Marks)• 3 sub-questions of 15 marks each on Rural and Urban Settlements <p>NB. ONE paragraph question of 8 marks in any of the three sub-questions</p> <p>QUESTION 2 (Economic Geography of South Africa) 60 Marks</p> <ul style="list-style-type: none">• Short objective questions (15 Marks)• 3 sub-questions of 15 marks each on Economic Geography of South Africa <p>NB. ONE paragraph question of 8 marks with any of the three sub-sections</p> <p>QUESTION 3 (Mapwork) 30 Marks</p> <ul style="list-style-type: none">• Map Skills and calculations (10 Marks)• Map interpretation (12 Marks)• GIS (8 Marks) <p>NB: The Topographical map and Orthophoto map of BLOEMFONTEIN will be used.</p>