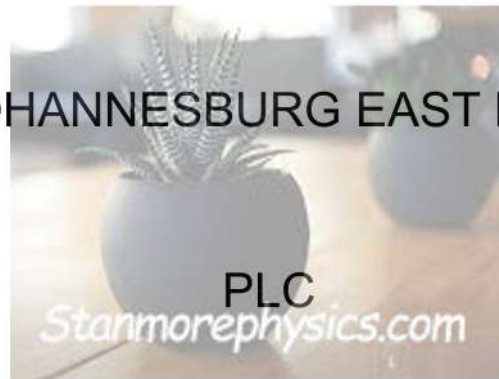




JOHANNESBURG EAST DISTRICT



GRADE 11



MARKS 100

TIME: 2 HOURS 30 MINUTES

This examination paper consists of 10 pages

INSTRUCTIONS AND INFORMATION

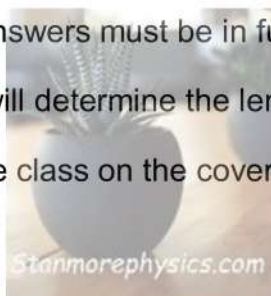
1. This paper consists of THREE sections, namely SECTION A, SECTION B and SECTION C.

SECTION A: COMPULSORY

SECTION B: COMPULSORY

SECTION C: Answer any TWO of the three questions from this section.

2. Read instructions for each question carefully and answer only what is required.
3. Write neatly and legible.
4. Except where instructions are given, answers must be in full sentences.
5. The mark allocation of each question will determine the length of your answer.
6. Please write your name and your grade class on the cover page of your answer sheet.



SECTION A: (COMPULSORY)

Answer ALL the questions in this section.

QUESTION 1

1.1 Various options are provided as possible answers to the following questions. Choose the most correct and write only the letter (A – D) next to the question numbers (1.1.1 – 1.1.5) in the ANSWER BOOK e.g 1.1.6 D

1.1.1 What should you NOT take into account when setting your goal?

- A. Your personal morals and values that you live by every day.
- B. Constitutional laws and values to uphold harmony in the country.
- C. What you can realistically achieve in the time you have available.
- D. Pressure from your parents.

1.1.2 Part of the national government responsibility is to:

- A. Build and maintain roads in specific provinces or municipalities.
- B. Create and vote on laws and policies whilst in parliament.
- C. Organise strikes and help the individual communities grow.
- D. Host clean-ups start campaigns and preserve public spaces.

1.1.3 The following are the requirements for a Bachelor pass in NSC:

- A. 40% Home language, 50% for 3 other subjects and 30% for Life Orientation
- B. 50% for language , 50% for 3 other subjects including Life Orientation.
- C. 40% for Home language, 50% for 4 other subjects excluding Life Orientation.
- D. 50% home language and First Additional Language, 5 other subjects at 50%

1.1.4 Which of the following is not true about gender based violence(GBV)

- A. men can also be victims of gender based violence.
- B. The majority of GBV cases are reported by females.
- C. Emotionally strong people can also experience GBV.
- D. GBV is limited to only physical assault against women.

1.1.5 Artificial food additives are chemicals known to cause:

- A. Weight loss
- B. Endurance
- C. Attention deficit disorder
- D. Healthy gums.



(5 x 1) (5)

1.2 Give ONE word/term for each of the following descriptions. Write only the word/term next to the question number e.g. 1.2.6 Goals in the ANSWER BOOK.

1.2.1 The principle that no person is above the law.

1.2.2 The question word that asks for the exact meaning of the term or words without providing a discussion.

1.2.3 A segment of the workforce associated with limited skill set or minimal economic value for the work performed.

1.2.4 The way people feel about and behave towards one another.

1.2.5 A state of complete physical, mental and social well-being. (5 x 1) (5)

1.3 Answer the following questions by writing the answer next to the question numbers (1.3.1 -1.3.5) Write your answer in full sentences.

1.3.1 What is nation building? (1 x 2) (2)

1.3.2 Explain the difference between study skill and study strategy (2 x 1) (2)

1.3.3 Discuss ONE benefit of scanning as a reading skill. (1 x 2) (2)

Read the extract below and answer the questions that follow.



RESPONSIBILITY OF COMMUNITIES IN ENSURING
SAFE AND HEALTHY LIVING
SOUTH AFRICA'S WATER SYSTEMS IN CRISIS

Water systems across the country seem not to be effectively maintained, leading to the poor quality of water in most communities. The behaviour of communities has also been found to be the contributing factors that lead to water pollution.

Intervention programmes intended to promote safe and healthy living seem not to be sustainable. Most communities now seek to petition local government for the urgent action in terms of the water crisis.



[adapted from <http://jamiat.org.za>. Accessed on 09/01/2023.]

1.3.4 What is a petition?

(1 x 1) (1)

1.3.5 Briefly state THREE advantages of online petition to local governments for urgent action in terms of the water crisis in communities. (3 x 1) (3)



TOTAL SECTIONA: 20

SECTION B: COMPULSORY.

Answer ALL the questions in this section. Write your answers in full sentences.

QUESTION 2.

Read the extract below and answer the questions that follow.

Student funding an ongoing problem in South Africa

According to the vice chancellor of the University of Zululand Professor Xoliswa Mtose, with no solution in sight for student funding issues in South Africa's higher education system, it is unsurprising that the academic year began with the protests.

Mtose made the comment during a webinar on student funding hosted by Fundi in collaboration with the Mail & Guardian. The simmering tensions that erupted during the 2015/2016 campaigns and recently, underlined the fact that the problem can no longer be postponed. The problem has continued to manifest itself as an entanglement of the evolving policy positions on government budget allocations in the sector and an overriding principle in South Africa's higher education funding that costs must be shared between students, other families and the government....further exacerbated by a mismatch between state funding, political expectations and societal realities. Hence the solution to the problem cannot be in isolation.

- 2.1 Define the term 'bursary' and state THREE factors that are commonly considered when awarding a bursary to an applicant. (1+3) (4)
- 2.2 Provide TWO reasons why learners may struggle to apply for bursaries. (2x1) (2)
- 2.3 Explain TWO factors that have contributed towards more students being able to study who would not ordinarily have been able to do so. (2x2) (4)
- 2.4 Discuss THREE reasons why learners may feel dissatisfied with the fees that they must pay for tertiary institutions. (3x2) (6)
- 2.5 Advise NSFAS officers on TWO practical strategies that they could put in place to create awareness of the available bursary opportunities for needy learners. (2x2) (4)

[20]

SECTION C

Answer any TWO questions in this section.

Your responses must consist of **paragraphs**. Marks will ONLY be allocated for responses written in full sentences.

QUESTION 4

Read the extract below and answer the question that follows:

TO WEED, OR NO TO WEED, THAT IS THE QUESTION

“South Africa’s constitutional court has recently ruled that personal use of cannabis is no longer a criminal offence, but the landmark ruling has left more questions than answers for many of the country’s residents and visitors eager to light up. Until recently, all use of marijuana, also called dagga, in South Africa was totally illegal. But in 2018, the High Court ruled that South Africa’s ban of the personal and private use of marijuana was an infringement on the country’s “constitutional right to privacy”.

Although the confirmation was met with celebration from those in favour of marijuana consumption, to the point that many people sparked up on the streets outside the court, experts have warned that the ruling is slightly more complex and nuanced than many realise. In fact, those who lit up on the steps of the Constitutional Court were in direct violation of the law. Deputy Chief Justice Raymond Zondo said that the judgment doesn’t specify the amount that can be used by an adult in private use; this must still be determined by South Africa’s parliament. He also clarified that “it must be for the personal use of the person”.

Source: Thompson, A. 2018. Available from:

<https://theculturetrip.com/africa/south-africa/articles/what-to-know-about-south-africas-marijuana-legalisation/>

Write an paragraphs on the dangers of substance abuse.


Use the following as a guideline:

- Define the term risky behaviour and explain why one should be knowledgeable about it. (1 + 1) (2)
- State THREE factors that may result in substance abuse at home. (3 x 1) (3)
- Discuss THREE ways that this new law could lead to risky behaviour (3 x 2) (6)
- Suggest THREE strategies that one could employ to convince his/her peers not to get involved with marijuana (weed). In your answer, also indicate the positive impact EACH of these strategies. (3 x 3) (9)

[20]

QUESTION 5

Study caption and image below and answer the question that follow.



Write paragraphs on how your digital footprint can affect your employment opportunities.

Use the following as a guideline:

- Briefly state FOUR possible reasons why our digital footprint is important when seeking job opportunities. (4 + 1) (4)
- Explain TWO ways on how a job seeker could create a negative impression of themselves to others on social media that will influence their chance of getting a job. (2 x 4) (8)
- Suggest TWO ways candidates can ensure their media profiles create a more positive image during their job search. In your answer, also indicate how EACH suggestion could encourage others to do the same. (2 x 4) (8)

[20]

QUESTION 6

Read the extract below and answer the question that follows:

ANIMAL “HORN”TINGS

“Last week, China's State Council said the country would reverse a ban on the trade of products made from tigers and rhinos. Officials in Beijing said that trade volume would be “controlled” and tiger bones and rhino horns would only be obtained from animals in captivity for use in “medical research or healing”.

There was no reason given for removing the ban and the announcement drew condemnation from wildlife activists along with doctors of traditional Chinese medicine and Chinese consumers. Tiger bones and rhino horns may have a role in traditional Chinese medicine, but critics say that trendy health products with no medical value made from endangered animals are only a status symbol for the wealthy.”

Source: Qian, J. 2018. Available from:

<https://www.dw.com/en/chinas-medicinal-tiger-bones-and-rhino-horns-tradition-or-travesty/a-46193315>

Write an paragraphs on cultural practices.

Use the following as a guideline:

- Define the term “inhumane cultural practice” and explain TWO ways the above ban could be considered an inhumane cultural practice. (1 + 2) (3)
- State TWO factors that influence cultural practices. (1 x 2) (2)
- Discuss THREE reasons why people continue with cultural practices even though they cause harm to other living creatures. (3 x 2) (6)
- Recommend THREE ways an active citizen could help to stop inhumane cultural practices. In your answers, also indicate how EACH action may help prevent possible future inhumane cultural practices. (3 x 3) (9)

[20]

TOTAL SECTION C: 40

GRAND TOTAL: 100

